

Rechenfrühstück Woche 29

Name: _____

4 0 3	5 5 9	1 2 6	1 7 1
- 3 6 2	- 3 8 5	- 1 0 8	- 1 2 9
_____	_____	_____	_____






MO

6 0 4	3 3 7	4 7 7	4 3 1
+ 1 0 9	+ 3 3 6	+ 3 8 8	+ 1 1 3
_____	_____	_____	_____

DI

<u>1 1 9 · 8</u>	<u>2 2 2 · 4</u>	<u>2 8 6 · 2</u>
<u>2 0 2 · 4</u>	<u>2 3 3 · 3</u>	<u>2 5 9 · 3</u>

MI



_____ Uhr

_____ Uhr


_____ Uhr

_____ Uhr

_____ Uhr

DO

Zeichne und berechne den Umfang! Quadrat $s = 3\text{ cm}$



FR

Rechenfrühstück Woche 29

Name: _____

4	0	3	5	5	9	1	2	6	1	7	1				
-	3	6	2	-	3	8	5	-	1	0	8	-	1	2	9
	1				1				1				1		
<hr/>				<hr/>				<hr/>				<hr/>			
	4	1	1	7	4	1	8	4	2						


MO

6	0	4	3	3	7	4	7	7	4	3	1				
+	1	0	9	+	3	3	6	+	3	8	8	+	1	1	3
	1				1				1	1					
<hr/>				<hr/>				<hr/>				<hr/>			
7	1	3	6	7	3	8	6	5	5	4	4				


DI

1	1	9	·	8	2	2	2	·	4	2	8	6	·	2
<hr/>														
	9	5	2	8	8	8	5	7	2					
2	0	2	·	4	2	3	3	·	3	2	5	9	·	3
<hr/>														
	8	0	8	6	9	9	7	7	7					


MI




5:30 Uhr




15:10 Uhr



22:15 Uhr




19:45 Uhr



18:05 Uhr

DO

Zeichne und berechne den Umfang! Quadrat $s = 3\text{ cm}$



FR